

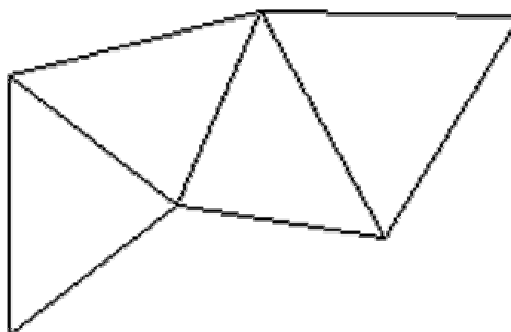
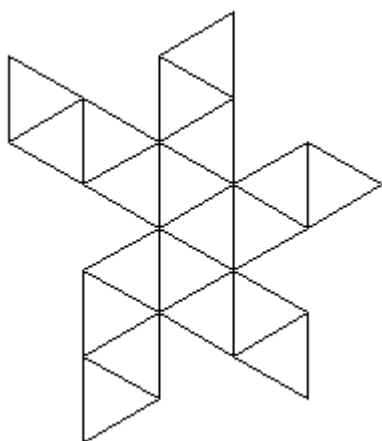
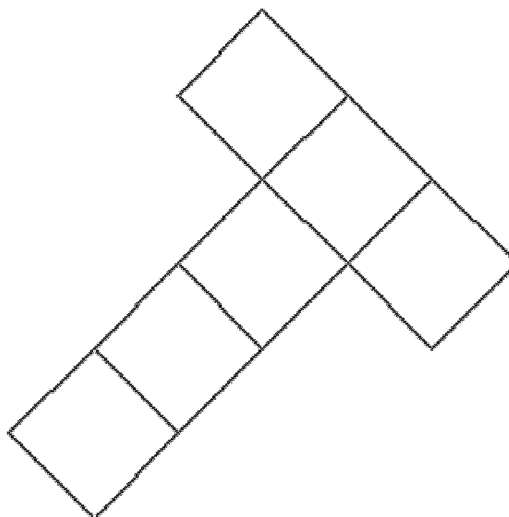
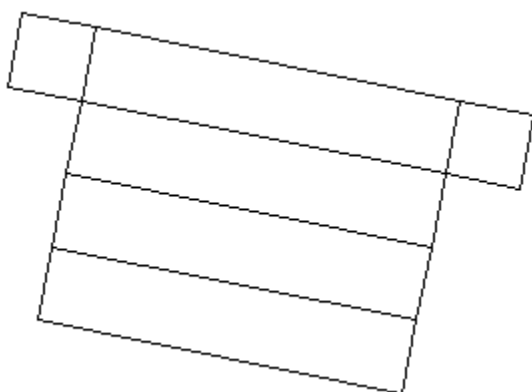


# Geometry & Measurement Student Activity

Space Geometry 2

This worksheet reviews material in the space geometry portion of the math program. An answer key is upside down at the end of the document.

1. Name the solids formed by the following nets.



2. Draw a net of a cylinder. What is the shape of its sides?

3. Draw a copy of a building or statue of which you are familiar. Identify all the solids (or shapes based on solids) it contains.